

Name _____

Choose the correct answer.

1. What does the 2 in 352 mean?

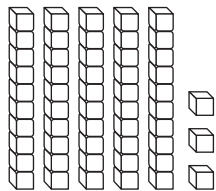
- 2 hundreds
- 2 tens
- 2 ones
- 2 zeroes

2. There are 17 children at the playground. 2 more children join them. How many children are there now?

$$\begin{array}{r} 17 \\ + 2 \\ \hline \end{array}$$

- 19 children
- 18 children
- 16 children
- 15 children

3. What number does the model show?



- 30 + 5
- 50 + 3
- 50 + 0
- 60 + 3

4. Ben has 4 star stickers, 5 balloon stickers, and 2 flower stickers. How many stickers does he have in all?

- 12 stickers
- 9 stickers
- 11 stickers
- 7 stickers

GO ON

Name _____

5. What number completes the table?

Add 5	
5	10
6	11
7	12
8	?

- 15 10
 13 5

6. There are 45 cars in the large parking lot. There are 21 cars in the small parking lot. How many cars are in both lots?

$$\begin{array}{r} 45 \\ + 21 \\ \hline \end{array}$$

- 76 66
 68 64

7. What symbol correctly compares the numbers?

$$182 \bigcirc 192$$

- >
 +
 =
 <

8. Koto wrapped 3 presents. She put 2 bows on each present. How many bows did she use?

$$2 + 2 + 2 = ?$$

- 8
 6
 4
 2

GO ON 

9. What number completes the table?

Add 6	
9	15
7	13
5	?
3	9

- 8 10
 9 11

10. Christy's address is 495 West Street. What does the 4 in 495 mean?

- 4 hundreds
 4 tens
 4 ones
 4 zeroes

11. Which is a way to model the problem?

Molly has 3 sisters. She wants to give 2 books to each of her sisters. How many books does she need?

- 2 groups of 2 books
 2 groups of 3 books
 3 groups of 2 books
 3 groups of 3 books

12. What number completes the table?

Subtract 8	
12	4
14	6
16	?
18	10

- 5 7
 6 8

13. There are 3 children on the swings, 9 children on the monkey bars, and 1 child on the slide. How many children are there in all?

- 10
- 11
- 12
- 13

14. Kassidy made a table.

Subtract 3	
9	6
10	7
?	8
12	9

What number completes the table?

- 15 13
- 11 14

15. Kara has 16 red balloons and 12 green balloons. How many balloons does she have in all?

$$\begin{array}{r} 16 \\ + 12 \\ \hline \end{array}$$

- 28
- 18
- 16
- 4

16. Max makes 5 gift bags. He puts 3 pencils in each bag. How many pencils does he use?

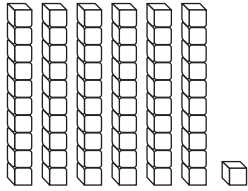
$$3 + 3 + 3 + 3 + 3 = ?$$

- 9
- 15
- 12
- 18

GO ON 

Name _____

17. Jason uses tens and ones to show a number.



What number does Jason show?

- 16 61
 51 65

18. Which is a way to model the problem?

Mrs. Lee makes 4 lunches. She puts 2 plums in each lunch. How many plums does she use in all?

- 2 groups of 4 plums
 4 groups of 2 plums
 4 groups of 4 plums
 6 groups of 2 plums

19. What number completes the table?

Subtract 6	
7	1
9	?
11	5
13	7

- 3 6
 8 12

20. Mr. Lowe worked 42 hours one week. He worked 36 hours the next week. How many hours did he work in all?

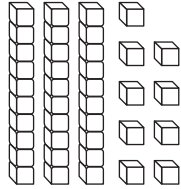
$$\begin{array}{r} 42 \\ + 36 \\ \hline \end{array}$$

- 78 hours 68 hours
 75 hours 65 hours

GO ON

Name _____

21. Which is a way to write the number?



- 20 + 5
- 20 + 9
- 30 + 5
- 30 + 9

22. David has 23 books about animals. He gets 4 more. How many books about animals does he have now?

- 29
- 28
- 27
- 25

23. Which is a rule for the table?

?	
9	13
8	12
7	11
6	10

- Add 4
- Add 3
- Subtract 5
- Subtract 3

24. Jon compares 186 and 194. Which way to compare is correct?

- $186 > 194$
- $194 < 186$
- $194 = 186$
- $194 > 186$

