

Name _____


Choose the correct answer.

1. The clock shows when the bus arrives. What time is **1 hour after** the time shown?



- 11:00
- 10:00
- 9:00
- 8:00

2. Cole uses the scoop and rice to fill the glass.



About how many scoops of rice does the glass hold?

- 5 scoops
- 10 scoops
- 15 scoops
- 20 scoops

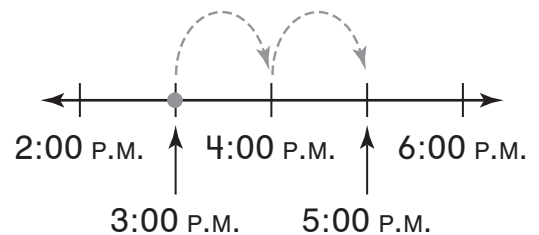
3. Look at the gray part of the strip.



Which is the correct label?

- 1 third
- 2 thirds
- 1 sixth
- 2 sixths

4. David's soccer game begins at 3:00 P.M. It ends at 5:00 P.M. How long is the game?




- 4 hours
- 2 hours
- 3 hours
- 1 hour

GO ON

Name _____

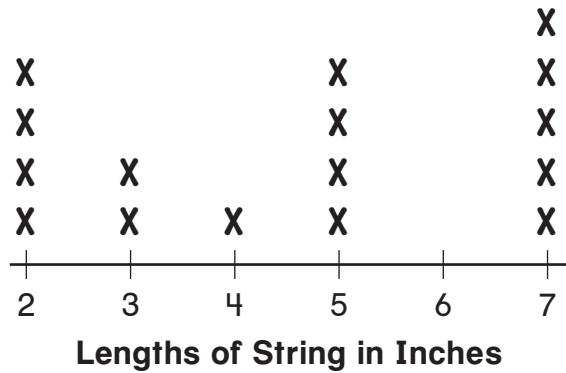
5. The clock shows when the game begins.



Justin gets to the game **1 hour before** the game begins. What time does Justin get to the game?

- 11:00 12:00
 11:30 2:00

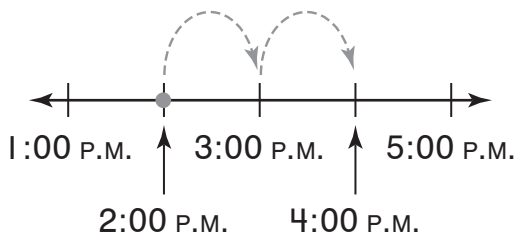
6. Use the line plot to solve the problem.



What is the length of the longest string?

- 3 inches 7 inches
 4 inches 8 inches

7. Brooke gets to the library at 2:00 P.M. She leaves at 4:00 P.M. How long does she stay at the library?



- 1 hour
 2 hours
 3 hours
 4 hours

8. Levi gets on the train at 8:10 A.M. He gets off the train at 8:45 A.M. How long does he ride the train?

- 55 minutes
 45 minutes
 35 minutes
 30 minutes

GO ON

Name _____

9. Look at the gray part of the strip.



Which is the correct label?

- 1 eighth
- 2 fourths
- 1 fourth
- 2 eighths

10. Which is true?



- 1 half > 1 fourth
- 1 half < 1 fourth
- 1 fourth = 1 half
- 1 half < 1 fourth

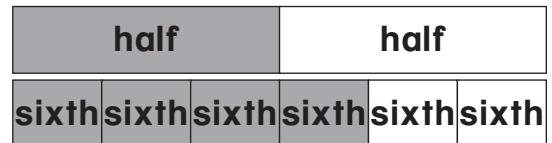
11. Ms. Chapman uses the scoop to fill the bowl with rice.



About how many scoops of rice does the bowl hold?

- 1 scoop
- 3 scoops
- 8 scoops
- 9 scoops

12. Which is true?



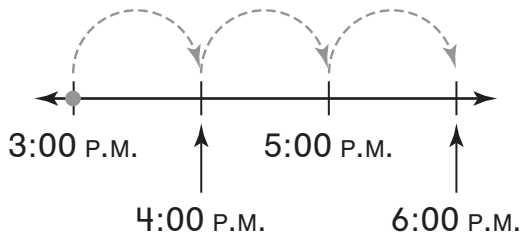
- 1 half > 4 sixths
- 1 half < 4 sixths
- 4 sixths < 1 half
- 1 half = 4 sixths

GO ON

Name _____

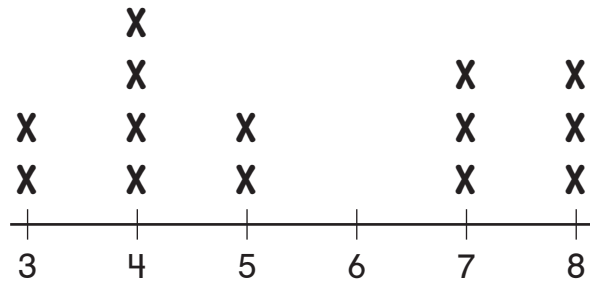
Write the correct answer.

- 13.** The movie begins at 3:00 P.M.
 It is over at 6:00 P.M. How
 long is the movie?



_____ hours

- 14.** Use the line plot to answer the
 question.



Lengths of Ribbons in Inches

How many ribbons are
 3 inches long?

_____ ribbons

- 15.** Look at the gray part of the strip.



Which label is correct? Circle it.

2 fourths

2 eighths

4 eighths

- 16.** Play practice begins at 3:15 P.M. Practice is over
 at 3:45 P.M. How long is play practice?

_____ minutes



Name _____

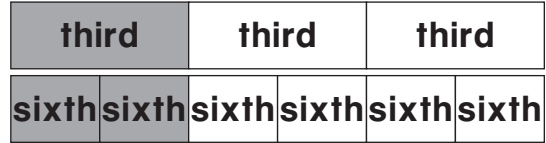
17. Look at the gray part of the strip.



Which label is correct? Circle it.

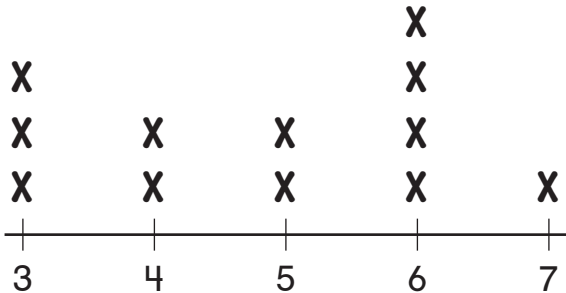
- 1 third
- 2 thirds
- 2 sixths

18. Write $>$, $<$, or $=$ to compare the fractions.



1 third ○ 2 sixths

19. Use the line plot to solve the problem.



Lengths of Pencils in Inches

How long are the shortest pencils?

_____ inches

20. Look at the gray part of the strip.




Which label is correct? Circle it.

- 3 thirds
- 3 sixths
- 4 sixths



Name _____

21. Thomas gets to school **1 hour after** the time shown on the clock. What time does Thomas get to school?



22. Look at the gray part of the strip.



Which label is correct? Circle it.

3 fourths

4 fourths

4 eighths

23. Lunch begins at 12:10 P.M. It ends at 12:50 P.M. How long is lunch?

_____ minutes

24. Mai uses the scoop to fill the bucket with sand.



About how many scoops of sand does the bucket hold?

Circle the best estimate.

about 2 scoops

about 10 scoops

