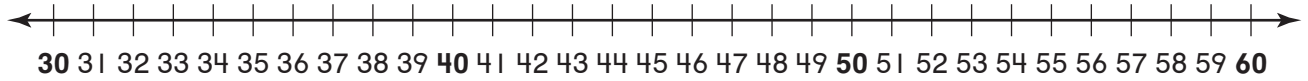


Name \_\_\_\_\_

**Choose the correct answer.**

1. Find the nearest ten for each number.

Which shows the best estimate of  $58 - 41$ ?



- $60 - 50 = 10$
- $60 - 30 = 30$
- $60 - 40 = 20$
- $70 - 30 = 40$

2. What the missing sum in the addition table?

- 6
- 7
- 8
- 9

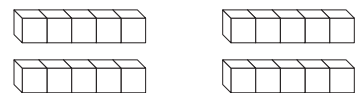
|   |   |   |   |   |   |    |
|---|---|---|---|---|---|----|
| + | 0 | 1 | 2 | 3 | 4 | 5  |
| 0 | 0 | 1 | 2 | 3 | 4 | 5  |
| 1 | 1 | 2 | 3 | 4 | 5 | 6  |
| 2 | 2 | 3 | 4 | 5 | 6 | 7  |
| 3 | 3 | 4 | 5 | 6 | 7 | 8  |
| 4 | 4 | 5 | 6 | 7 | 8 | 9  |
| 5 | 5 | 6 | 7 | 8 | 9 | 10 |

3. Which shows the numbers in order from **least** to **greatest**?

|     |
|-----|
| 465 |
| 378 |
| 460 |

- $465 < 378 < 460$
- $378 < 465 < 460$
- $378 < 460 < 465$
- $460 < 465 < 378$

4. There are 4 baskets. Hana puts 5 apples in each basket.



How many apples does she put in the baskets?

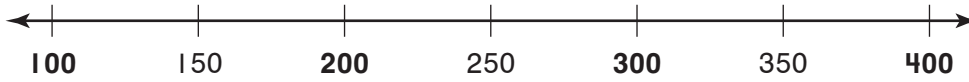
- 5
- 15
- 9
- 20

**GO ON**

Name \_\_\_\_\_

5. Find the nearest hundred for each number.

Which shows the best estimate of  $130 + 370$ ?



- $200 + 400 = 600$         $100 + 300 = 400$   
  $100 + 400 = 500$         $100 + 200 = 300$

6. Caleb makes 5 towers. Each tower has 10 blocks.



How many blocks does he use?

- 70       60       50       10

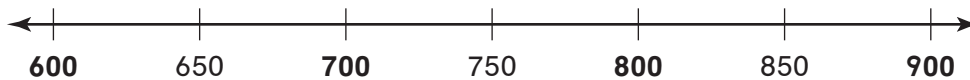
7. What is the missing sum in the addition table?

|   |   |   |   |   |   |   |
|---|---|---|---|---|---|---|
| + | 0 | 1 | 2 | 3 | 4 | 5 |
| 0 | 0 | 1 | 2 | 3 | 4 | 5 |
| 1 | 1 | 2 | 3 | 4 | 5 | 6 |
| 2 | 2 | 3 | 4 | 5 | 6 | 7 |
| 3 | 3 | 4 | 5 | 6 | 7 | 8 |
| 4 | 4 |   | 6 | 7 | 8 | 9 |

- 3       5  
 4       6

8. Find the nearest hundred for each number.

Which shows the best estimate of  $829 - 632$ ?




- $900 - 500 = 400$         $800 - 600 = 200$   
  $800 - 500 = 300$         $800 - 700 = 100$

GO ON

Name \_\_\_\_\_

9. Mr. Roper puts 2 fish in each bowl. There are 5 bowls.



How many fish does Mr. Roper put in the bowls?

- 2                       7                       10                       12

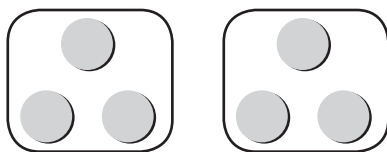
10. Find the nearest ten for each number.

Which shows the best estimate of  $31 + 27$ ?



- $30 + 20 = 50$                         $40 + 30 = 70$   
  $30 + 30 = 60$                         $40 + 40 = 80$

11. Aiden has 6 cheese slices. He puts the same number of cheese slices on each of 2 sandwiches.



How many cheese slices are on each sandwich?

- 1                       3  
 2                       4

12. There are 10 cubes in each box. There are 3 boxes of cubes.



How many cubes are there altogether?

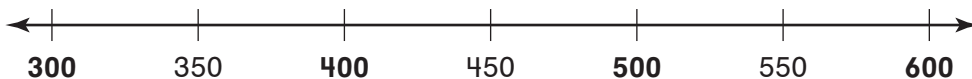
- 30                       13  
 20                       10

GO ON

Name \_\_\_\_\_

**Write the correct answer.**

13. Find the nearest hundred for each number. Add the hundreds to estimate. Estimate the sum of  $329 + 460$ .



\_\_\_\_\_ + \_\_\_\_\_ = \_\_\_\_\_

An estimate of the sum is \_\_\_\_\_.

14. Amanda puts 2 stamps on each card.  
How many stamps does she put on 6 cards?

\_\_\_\_\_ stamps

15. Write the numbers in order from **least** to **greatest**.

156  
299  
253

\_\_\_\_\_ < \_\_\_\_\_ < \_\_\_\_\_

16. Brad puts 2 tomatoes in each salad. There are 4 salads.



How many tomatoes does he use?

\_\_\_\_\_ tomatoes

GO ON 

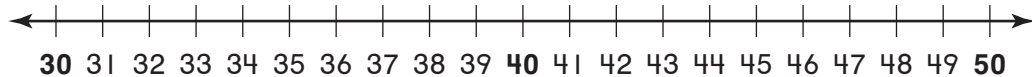
Name \_\_\_\_\_

17. Connor gives 15 stickers to friends. He gives 3 stickers to each friend.

How many friends get stickers?

\_\_\_\_\_ friends

18. Find the nearest ten for each number. Add the tens to estimate. Estimate the sum of  $34 + 48$ .



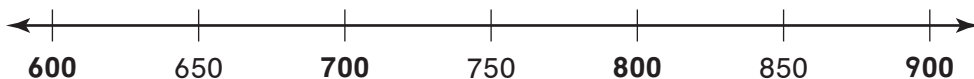
\_\_\_\_\_ + \_\_\_\_\_ = \_\_\_\_\_

An estimate of the sum is \_\_\_\_\_.

19. Sophia uses 10 blocks to build each tower. How many towers can she build with 40 blocks?

\_\_\_\_\_ towers

20. Find the nearest hundred for each number. Subtract the hundreds to estimate. Estimate the difference of  $825 - 675$ .



\_\_\_\_\_ - \_\_\_\_\_ = \_\_\_\_\_

An estimate of the difference is \_\_\_\_\_.



Name \_\_\_\_\_

21. Mrs. Allen has 12 roses. She puts 3 roses in each vase.



How many vases can she fill?

\_\_\_\_\_ vases

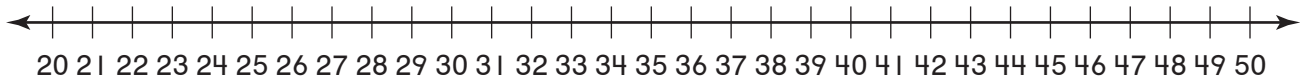
22. Avery has 15 pears. She puts the same number of pears in each of 3 baskets.



How many pears are in each basket?

\_\_\_\_\_ pears

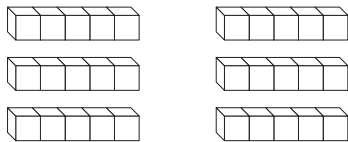
23. Find the nearest ten for each number. Subtract the tens to estimate. Estimate the difference of  $48 - 32$ .



\_\_\_\_\_ - \_\_\_\_\_ = \_\_\_\_\_

An estimate of the difference is \_\_\_\_\_.

24. Hailey puts 5 stars on each bookmark. She makes 6 bookmarks.



How many stars does she use?

\_\_\_\_\_ stars

