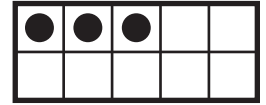





Name _____

Directions/Questions are at bottom of page to be read by teacher.



26

33


35



1 o'clock

2 o'clock

3 o'clock



6 ones

8 ones

10 ones



1 o'clock

6 o'clock


9 o'clock

DIRECTIONS 1. How many counters are there? Mark under the number. 2. About what time does the clock show? Mark under the time. 3. How many ones are there? Mark under the number. 4. What time does the clock show? Mark under the time.



Name _____

5




44

46

48

6



24

27

34

7



8 o'clock

10 o'clock

12 o'clock

8



3 o'clock


5 o'clock

11 o'clock

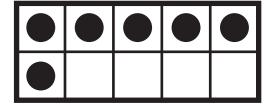



DIRECTIONS 5. How many counters are there? Mark under the number. 6. How many counters are there? Mark under the number. 7. About what time does the clock show? Mark under the time. 8. What time does the clock show? Mark under the time.

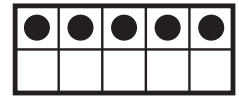






Name _____



_____ ones










DIRECTIONS 9. How many ones are shown? Write the number. 10. How many counters are there? Write the number. 11. How many counters are there? Write the number. 12. What number is missing on the clock? Write the number.



Name _____





_____ o'clock



_____ o'clock



DIRECTIONS 13. How many counters are there? Write the number. 14. What time does the clock show? Write the time. 15. About what time does the clock show? Write the time. 16. What number is missing on the clock? Write the number.

